

SPECIAL EXAM TWO 2022

SOCIAL STUDIES

Time allowed: 2 hours 15 minutes

Random No.						Personal No.		

Candidate's Name: _____

Candidate's Signature: _____

District: _____ **Stream** _____

Read the following instructions carefully.

1. This paper is made up of two Sections: A and B.
2. Answers to both sections must be written in the spaces provided in full sentences.
3. Section A has 40 questions (40 marks)
4. Section B has 15 questions (60 marks)
5. Attempt all questions. All answers to both sections A and B must be written in the spaces provided.
6. All answers must be written in blue or black ballpoint pen or ink but not in pencil. All work done in pencil, except diagrams, will NOT be marked.
7. Crossing out of answers will lead to loss of marks.
8. Any handwriting that cannot be easily read may lead to loss of marks.

FOR EXAMINERS USE ONLY		
QN. NO.	MARK	SIGN
1 - 10		
11 - 20		
21 - 30		
31 - 40		
41 - 43		
44 - 46		
47 - 49		
50 - 52		
53 - 55		

SECTION A: 40 MARKS

1. What term is used to mean the process by which block mountains were formed?

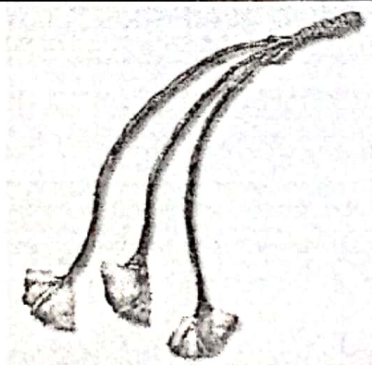
2. Give **one** way in which people living in mountainous areas solve the problem of poor transport network.

3. State **one** reason why convectional rainfall is commonly recieved around lake areas.

4. How is production of similar goods a disadvantage to member countries of the same regional body?

5. Give **one** factor that has encouraged recent migrations of people from one country to another.

Below is a diagram of a tool that was used by early man during the stone age period.



6. How was the above tool helpful to early man?

7. Give a reason why most explorers used Bagamoyo to enter East Africa.

8. Why did German lose control over Rwanda and Burundi after the first world war?

9. What does the sun on the Uganda coat of Arms represent?

10. State any **one** disadvantage of not preparing a budget for a school.

11. Mention any **one** way in which early explorers contributed to the development of East Africa.

12. How is the work of a permanent secretary different from that of a Resident District Commissioner?

13. State **one** reason why the floor of the rift valley is always having high temperatures.

14. Give a reason why Lake Kyoga has a lot of floating vegetation.

15. Name **one** document that can be used to show ownership of land in Uganda.

16. Give **one** social reason for the construction of Kenya-Uganda railway.

17. Name any **one** UN relief Agency that cares for the people who have been affected by floods in Uganda.

18. How do the South East Trade winds affect the climate of the eastern part of Africa?

19. State **one** way the Judiciary promotes peace in a country.

20. Which type of industries depend on agricultural products as their raw-materials?

The diagram below shows two road signs. Use them to answer questions 21 and 22.



21. What does the road sign marked **B** mean?
-
22. How does putting road sign **A** help to control road accidents on busy roads?
-
23. State any **one** disadvantage of getting leaders through inheritance.
-
24. Why is water transport the best for mirrors and pots?
-
25. Which element of a map helps a map reader to calculate the distance between places on a map?
-
26. Give any **one** sign of respect among children in a home.
-
27. Name the type of tax charged on goods produced within a country.
-
28. At what age does a person qualify to get voting rights in Uganda?
-
29. State any **one** way people in low land areas of Uganda control soil erosion.
-
30. Give any **one** effect of global warming to farmers.
-
31. Give **one** way Kabaka Yekka party helped Uganda People's Congress to lead Uganda to independence.
-
32. What was the major item of trade during the Trans-Saharan Trade?
-
33. Mention **one** way in which Africans showed that they were not happy with the European rule.
-
34. What is barter trade?
-
-

35. State **one** danger of the mining sector to the environment.

For each of the questions 36 to 40, answer EITHER Christian OR Islamic questions but not both. No mark will be awarded to a candidate who attempts both activities in a particular number.

36. EITHER:

State any **one** way in which the Bible is different from other books.

OR:

State **one** way in which the Quran is different from other books.

37. EITHER:

Give **one** way in which Christian marriages have promoted morals among Christians.

OR:

Give **one** way in which Nikka has promoted morals among Muslims.

38. EITHER:

Name the Kabaka of Buganda who welcomed the first Christian missionaries to Uganda.

OR:

Name the Kabaka of Buganda who welcomed the first Arab traders to Buganda.

39. EITHER:

What helped Jesus christ to exercise his authority?

OR:

What helped Prophet Muhammad (PBUH) to be accepted by people?

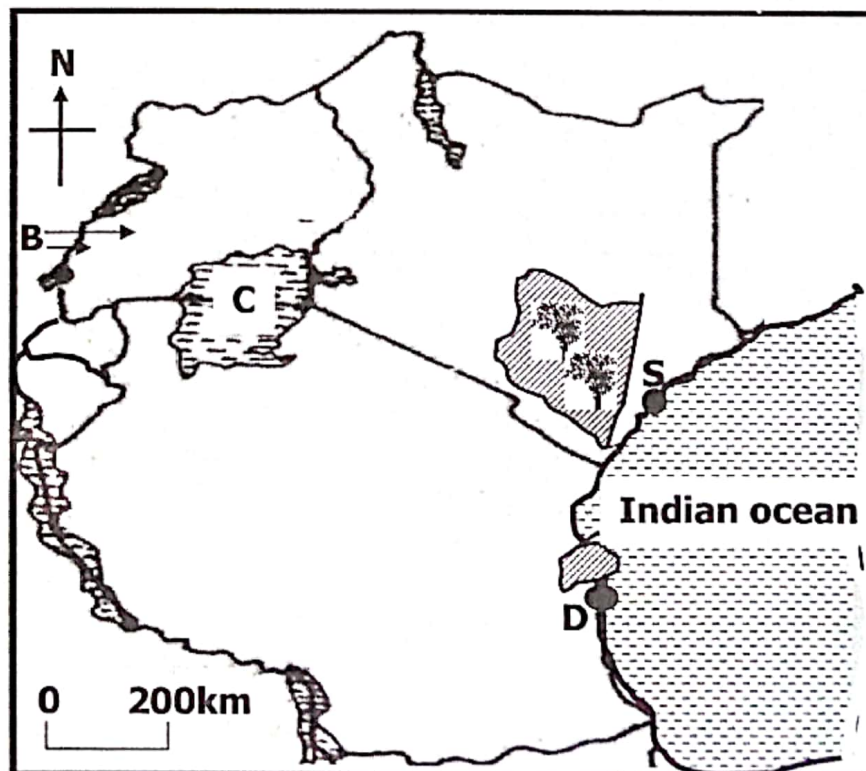
40. EITHER:
Give any **one** reason why every Christian should have friends.

OR:

Give any **one** reason why every Muslim should have friends.

SECTION B:60 MARKS

41. a) Mention any **two** members of the East African Community (EAC) that were not member states by 2000.
- i) _____
- ii) _____
- b) Give any **two** benefits the above mentioned states enjoy for joining the EAC.
- i) _____
- ii) _____
42. **Study the map of East Africa below and use it to answer the questions that follow.**



- a) Name any **one** tribe in Uganda that belongs to the tribal group which entered using route marked **B**.

- b) How did the forest marked slow down the builders of the Uganda-Kenya Railway?

- c) Why did most European explorers enter East Africa through town **D** instead of town **S**?

- d) Name the commonest type of fish caught in lake marked **C**.

43. a) Mention any **two** examples of plantation crops grown in Uganda.
i) _____ ii) _____
- b) Give **one** reason why the government is encouraging Ugandan farmers to grow plantation crops.

- c) State any **one** problem plantation farmers face in Uganda.

44. a) Name the system of trade where African chiefs and kings exchanged their tribesmen with traders for material riches.

- b) State **one** reason why the above named system of trade took long to end in East Africa.

- c) Mention any **one** tribe in East Africa that participated in the above trade.

- d) How did the above system of trade negatively affect the social life of the East African people?

45. a) Mention any **two** activities that children do during school assemblies.
i) _____
ii) _____
- b) In which **one** way can children live in peace at school?

- c) Write any **one** need of a school going child provided by the school.

46. a) Give any **one** factor that favoured the location of Gezira Irrigation Scheme in Sudan.

- a) Mention any **two** problems faced by the Gezira Irrigation Scheme in Sudan.

- b) State **one** way farmers in the Gezira Irrigation Scheme can improve on crop yields.

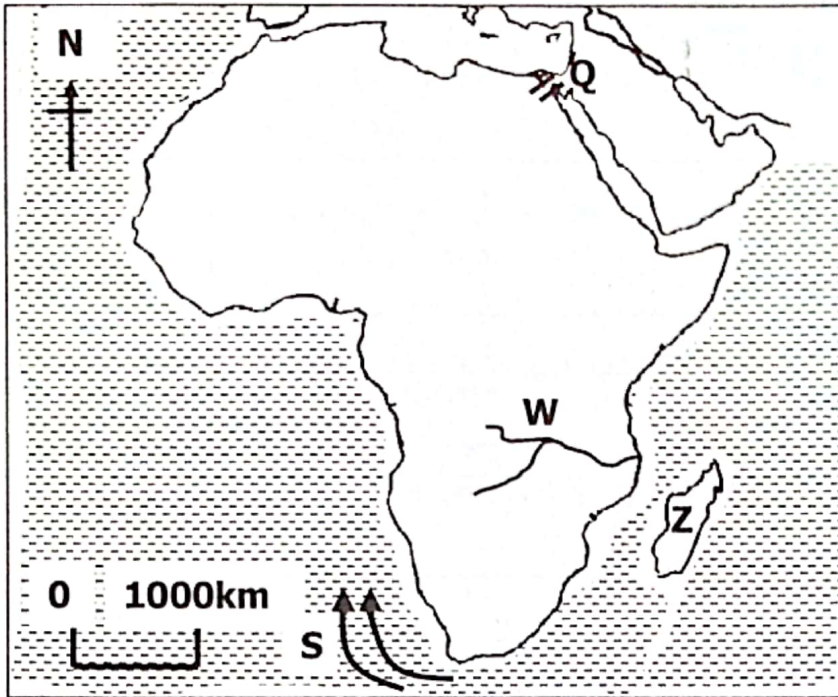
47. a) What role did the following personalities play in Uganda's nation building?
i) Professor George Willberforce Kakoma

ii) Grace Ibingira

- b) If you were in Uganda before 1962, state **one** thing you would do to get your country's independence from the colonialists.

- c) State any **one** problem you would get in your struggle for independence.

48. Study the map of Africa below and use it to answer the questions that follow.



- a) Name the following on the above map.
- i) Island marked **Z** _____
- ii) Ocean current marked **S** _____
- b) Why was the feature marked **Q** constructed?
- _____
- c) How was river marked **W** important to the MajiMaji fighters?
- _____

49. a) List **A** below has some Multipurpose Rivers in Africa and List **B** has dams projects that are found on them.

List A

River Nile
River Zambezi
River Volta

List B

Akasombo dam
Aswan High dam
Kariba dam

Select a suitable dam project from List **B** and match it to multi-purpose river on which it was built in List **A**.

- i) River Nile _____
- ii) River Zambezi _____
- iii) River Volta _____

- b) State any **one** way multi-purpose river projects are important to a country's development.

50. a) Name the type of natural vegetation that covers most parts of East Africa.

- b) Why do most wild animal species like living in the above named type of natural vegetation?

- c) Give **one** danger of encroaching on natural vegetation reserves.

- d) How can local authorities help to conserve natural vegetation in their areas?

For each of the questions 51 to 55, answer EITHER Christian OR Islamic questions but not both. No mark will be awarded to a candidate who attempts both alternatives in a particular number.

51. EITHER:

- a) Write the greatest commandment God gave to Moses.

- b) What general name was given to the Ten commandments God gave to Moses?

- c) How does the keeping of the Ten commandments help Christians;
i) on earth? _____
ii) after death? _____
- OR:
- a) Which holy book did Allah reveal to the last prophet in Islam?

- b) Why is the above named book called the greatest miracle of the last prophet in Islam?

- c) How does believing and practicing according to named Holy book help Muslims;
i) on earth? _____
ii) after death? _____

52. EITHER:

"I baptize you with water to show that you have repented, but the one who will come after me will baptize you with the Holy Spirit and fire." (Matthew 3:11)

a) Who preached the above message?

b) According to the message, who will baptise using the Holy Spirit and fire?

c) Why is water used during baptism?

d) State any **one** reason why all christians should be baptised.

OR:

"Say: He is Allah, the one and only, Allah, the Eternal, Absolute, He begetteth not, nor is He begotten, and there is none unto Him."

a) Which surat in the Holy Quran is quoted?

b) Write down **two** important lessons we learn from the above surat.

i) _____

ii) _____

c) In which **one** way does reading the above surah help Muslims?

53. EITHER:

a) Give any **two** traditional ways of reconciling with one another.

i) _____

ii) _____

b) State any **two** values of reconciliation in a Christian community.

i) _____

ii) _____

OR:

a) Give any **two** traditional ways of reconciling with one another.

i) _____

ii) _____

b) State any **two** values of reconciling with one another in a Muslim community.

- i) _____
- ii) _____

54. EITHER:

a) Mention any **two** promises God made to Abraham.

- i) _____
- ii) _____

b) In which **two** ways did Abraham show his faith to God?

- i) _____
- ii) _____

OR:

a) Mention any **two** wives of Prophet Ibrahim.

- i) _____ ii) _____

b) In which **two** ways did Prophet Ibrahim show his faith to Allah?

- i) _____
- ii) _____

55. FOR BOTH:

a) As a candidate, give any **two** things you have to do to keep closer to God/Allah.

- i) _____
- ii) _____

b) State any **two** reasons why God/Allah wants us to ask for forgiveness whenever we do wrong.

- i) _____
- ii) _____

*****END*****